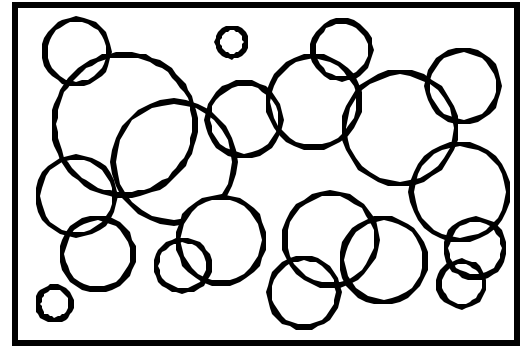


Name: \_\_\_\_\_ Date: \_\_\_\_\_

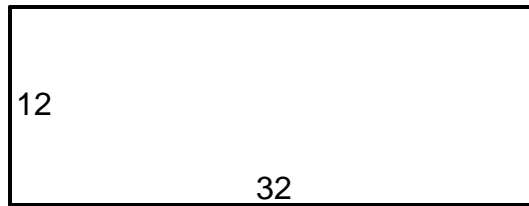
Teacher: \_\_\_\_\_ Class: \_\_\_\_\_

## Perimeter and Area

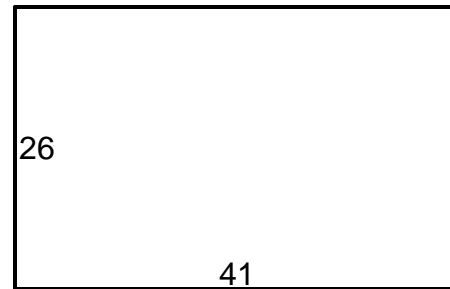
Find the area.



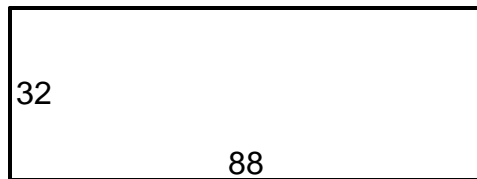
1. \_\_\_\_\_




4. \_\_\_\_\_




2. \_\_\_\_\_




5. \_\_\_\_\_



3. \_\_\_\_\_



6. \_\_\_\_\_



Answer Key

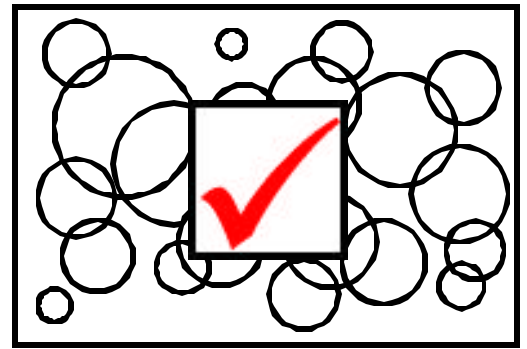
Date: \_\_\_\_\_

Teacher: \_\_\_\_\_

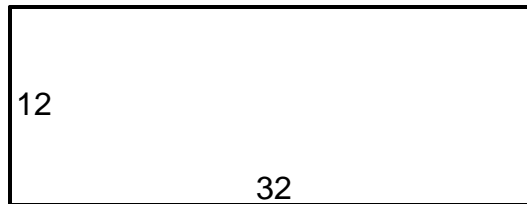
Class: \_\_\_\_\_

## Perimeter and Area


Find the area.



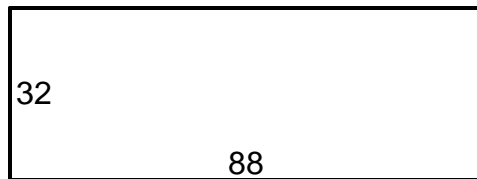
1.  $A=384^2$  \_\_\_\_\_




4.  $A=1,066^2$  \_\_\_\_\_




2.  $A=2,816^2$  \_\_\_\_\_



5.  $A=3,504^2$  \_\_\_\_\_



3.  $A=310^2$  \_\_\_\_\_



6.  $A=5,724^2$  \_\_\_\_\_

