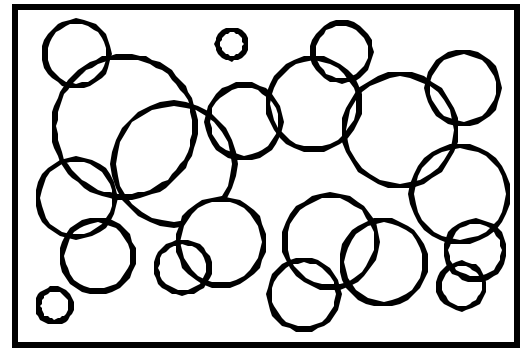


Name: \_\_\_\_\_ Date: \_\_\_\_\_

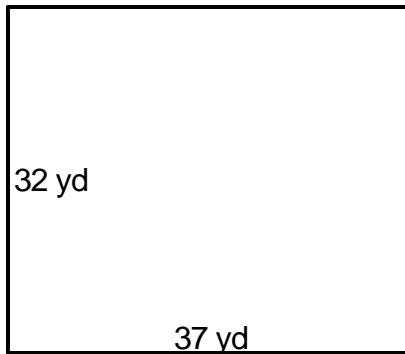
Teacher: \_\_\_\_\_ Class: \_\_\_\_\_

# Perimeter and Area

Find the area.



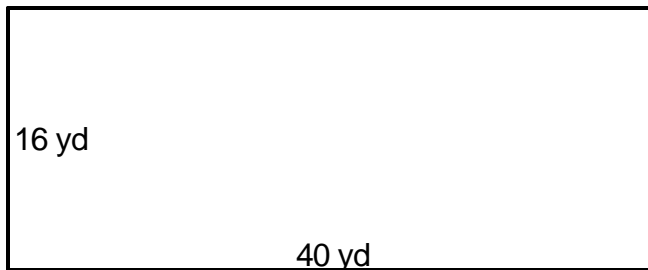
1. \_\_\_\_\_



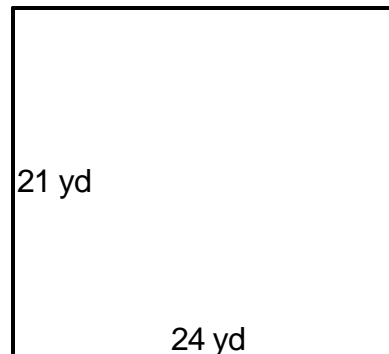
4. \_\_\_\_\_



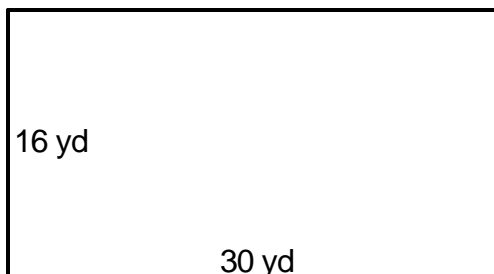
2. \_\_\_\_\_



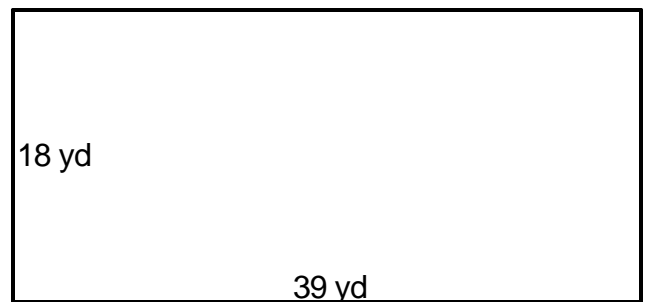
5. \_\_\_\_\_



3. \_\_\_\_\_



6. \_\_\_\_\_



Answer Key

Date: \_\_\_\_\_

Teacher: \_\_\_\_\_

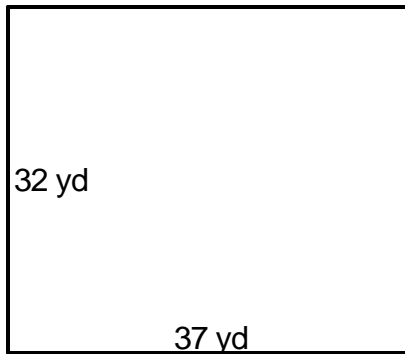
Class: \_\_\_\_\_

## Perimeter and Area

Find the area.



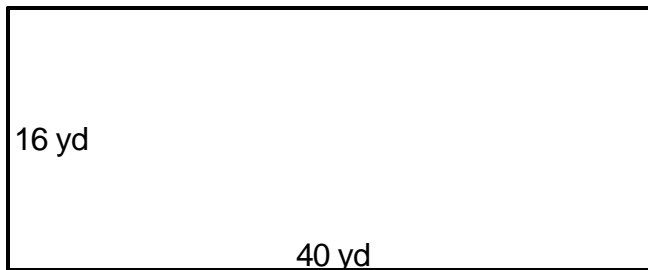
1.  $A=1,184\text{yd}^2$  \_\_\_\_\_



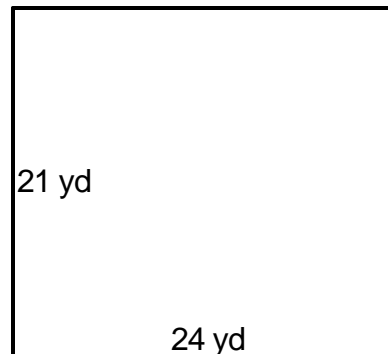
4.  $A=2,464\text{yd}^2$  \_\_\_\_\_



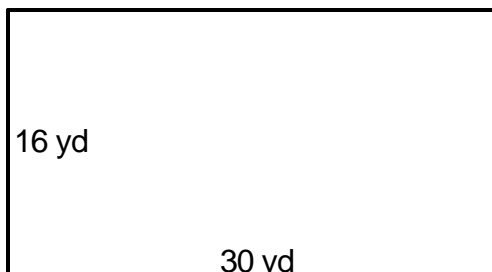
2.  $A=640\text{yd}^2$  \_\_\_\_\_



5.  $A=504\text{yd}^2$  \_\_\_\_\_



3.  $A=480\text{yd}^2$  \_\_\_\_\_



6.  $A=702\text{yd}^2$  \_\_\_\_\_

