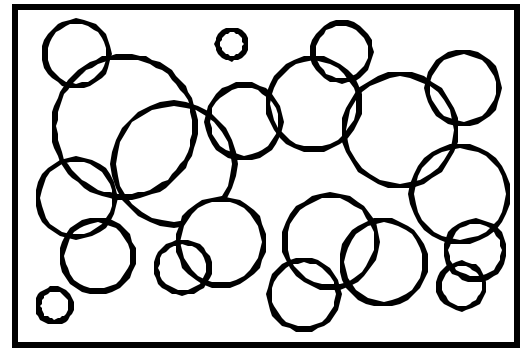


Name: \_\_\_\_\_ Date: \_\_\_\_\_

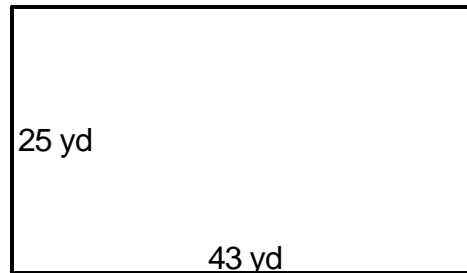
Teacher: \_\_\_\_\_ Class: \_\_\_\_\_

## Perimeter and Area

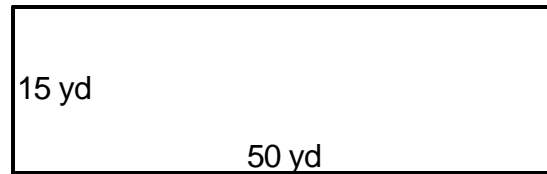
Find the area.



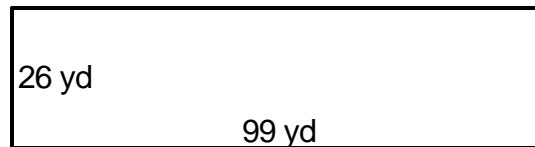
1. \_\_\_\_\_



4. \_\_\_\_\_



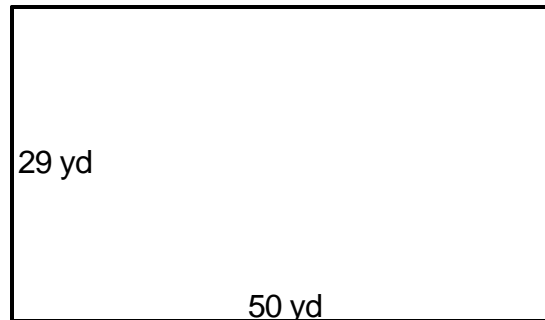
2. \_\_\_\_\_



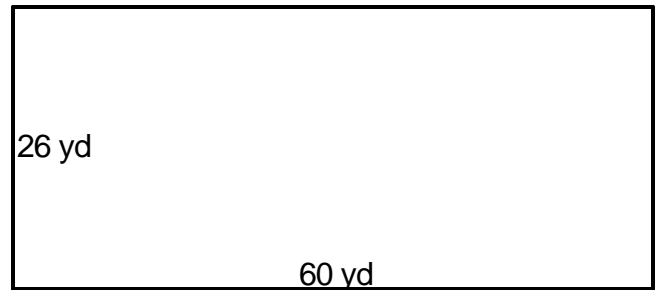
5. \_\_\_\_\_



3. \_\_\_\_\_



6. \_\_\_\_\_



Answer Key

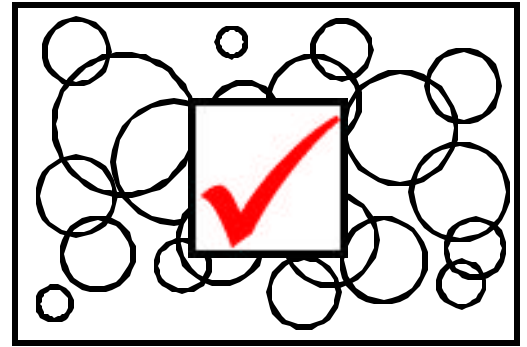
Date: \_\_\_\_\_

Teacher: \_\_\_\_\_

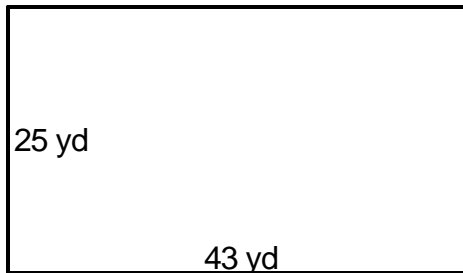
Class: \_\_\_\_\_

## Perimeter and Area

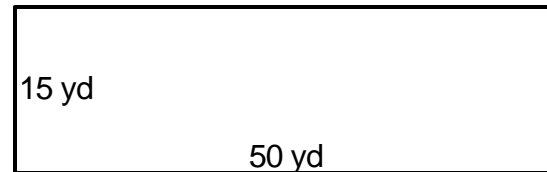
Find the area.



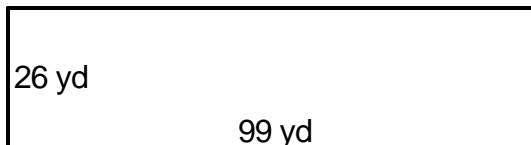
1.  $A=1,075\text{yd}^2$  \_\_\_\_\_



4.  $A=750\text{yd}^2$  \_\_\_\_\_



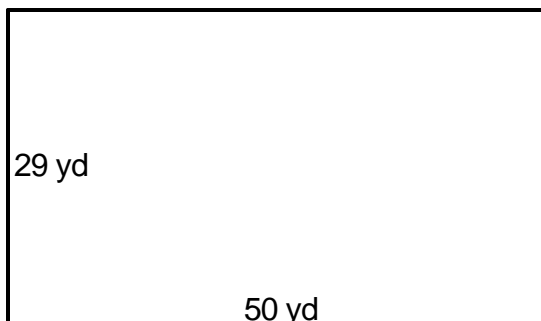
2.  $A=2,574\text{yd}^2$  \_\_\_\_\_



5.  $A=897\text{yd}^2$  \_\_\_\_\_



3.  $A=1,450\text{yd}^2$  \_\_\_\_\_



6.  $A=1,560\text{yd}^2$  \_\_\_\_\_

