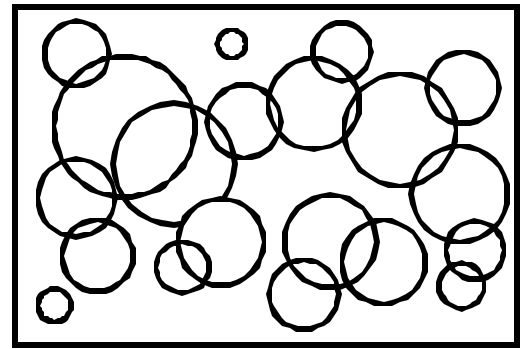


Name: \_\_\_\_\_ Date: \_\_\_\_\_

Teacher: \_\_\_\_\_ Class: \_\_\_\_\_

# Perimeter and Area

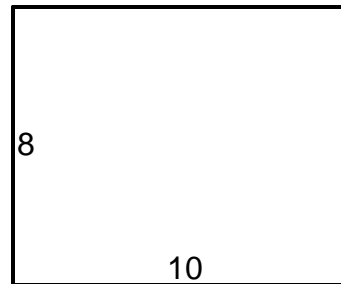
Find the perimeter.




1. \_\_\_\_\_




4. \_\_\_\_\_



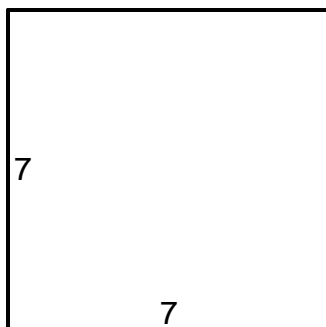
2. \_\_\_\_\_




5. \_\_\_\_\_



3. \_\_\_\_\_



6. \_\_\_\_\_



Answer Key

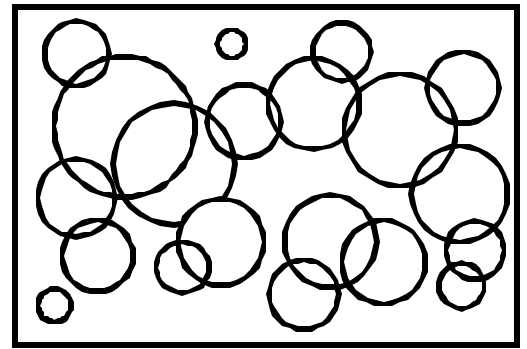
Date: \_\_\_\_\_

Teacher: \_\_\_\_\_

Class: \_\_\_\_\_

# Perimeter and Area

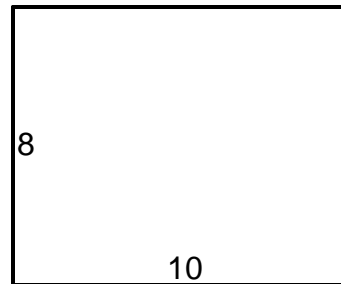
Find the perimeter.




1. P=82 \_\_\_\_\_




4. P=36 \_\_\_\_\_



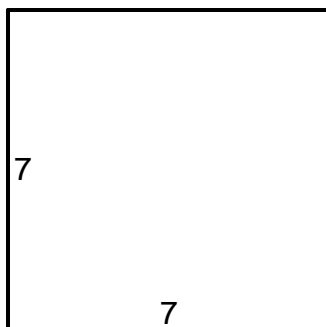
2. P=28 \_\_\_\_\_



5. P=46 \_\_\_\_\_



3. P=28 \_\_\_\_\_



6. P=42 \_\_\_\_\_

