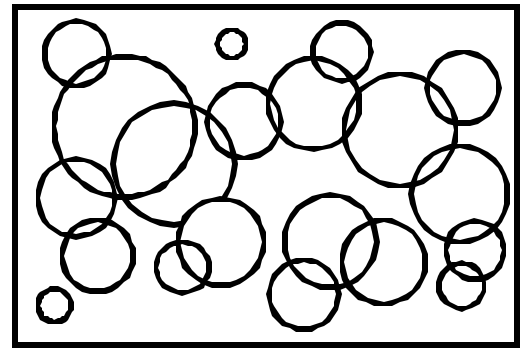


Name: \_\_\_\_\_ Date: \_\_\_\_\_


Teacher: \_\_\_\_\_ Class: \_\_\_\_\_

## Perimeter and Area


Find the perimeter.



1. \_\_\_\_\_




4. \_\_\_\_\_



2. \_\_\_\_\_



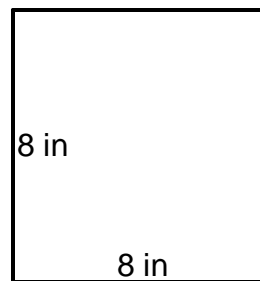
5. \_\_\_\_\_



3. \_\_\_\_\_



6. \_\_\_\_\_



Answer Key

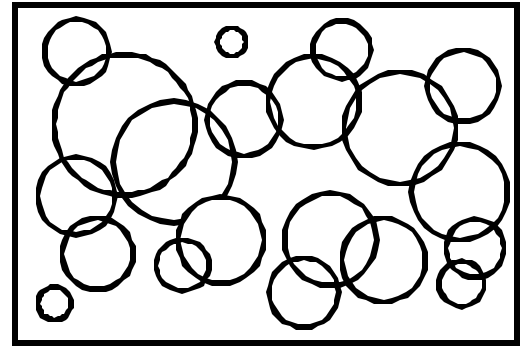
Date: \_\_\_\_\_

Teacher: \_\_\_\_\_

Class: \_\_\_\_\_

## Perimeter and Area

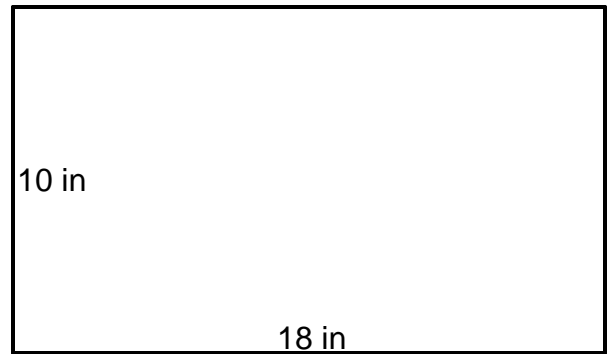
Find the perimeter.



1.  $P=34in$  \_\_\_\_\_



4.  $P=56in$  \_\_\_\_\_




2.  $P=40in$  \_\_\_\_\_



5.  $P=84in$  \_\_\_\_\_



3.  $P=38in$  \_\_\_\_\_



6.  $P=32in$  \_\_\_\_\_

